

Time: 10 Minutes

Paper Math 4




Total Marks: 10

6th Month, 1st Week, 4th Day | Syllabus: Unit 6: Exercise No. 3 Q No. 3

Q.No.1. Draw the parts of following circles:

(10)

سوال نمبر 1: درج ذیل دائروں کے حصے بتائیں:

		
Diameter of circle دائرے کا قطر	Radius of circle دائرے کا رداس	Centre of circle دائرے کا مرکز

Time: 10 Minutes

Paper Math 4




Total Marks: 10

6th Month, 1st Week, 4th Day | Syllabus: Unit 6: Exercise No. 3 Q No. 3

Q.No.1. Draw the parts of following circles:

(10)

سوال نمبر 1: درج ذیل دائروں کے حصے بتائیں:

		
Diameter of circle دائرے کا قطر	Radius of circle دائرے کا رداس	Centre of circle دائرے کا مرکز

Time: 10 Minutes

Paper Math 4




Total Marks: 10

6th Month, 1st Week, 4th Day | Syllabus: Unit 6: Exercise No. 3 Q No. 3

Q.No.1. Draw the parts of following circles:

(10)

سوال نمبر 1: درج ذیل دائروں کے حصے بتائیں:

		
Diameter of circle دائرے کا قطر	Radius of circle دائرے کا رداس	Centre of circle دائرے کا مرکز

Time: 10 Minutes

Paper Math 4




Total Marks: 10

6th Month, 1st Week, 4th Day | Syllabus: Unit 6: Exercise No. 3 Q No. 3

Q.No.1. Draw the parts of following circles:

(10)

سوال نمبر 1: درج ذیل دائروں کے حصے بتائیں:

		
Diameter of circle دائرے کا قطر	Radius of circle دائرے کا رداس	Centre of circle دائرے کا مرکز